













Puzzle fracción de un número

Calcula, Recorta, pega y colorea.

Nombre: Fecha:

| | | |
|---|--|--|
| $\frac{1}{1}$ de 1 = <input type="text"/> <input type="text"/>  $1 \begin{array}{r} 1 \\ 1 \end{array} \quad \begin{array}{r} \\ \times 1 \\ \hline 1 \end{array}$ | $\frac{2}{2}$ de 14 = <input type="text"/> <input type="text"/>  | $\frac{3}{3}$ de 30 = <input type="text"/> <input type="text"/>  |
| $\frac{8}{8}$ de 8 = <input type="text"/> <input type="text"/>  | $\frac{6}{8}$ de 16 = <input type="text"/> <input type="text"/>  | $\frac{4}{7}$ de 21 = <input type="text"/> <input type="text"/>  |
| $\frac{2}{5}$ de 40 = <input type="text"/> <input type="text"/>  | $\frac{7}{9}$ de 72 = <input type="text"/> <input type="text"/>  | $\frac{7}{9}$ de 36 = <input type="text"/> <input type="text"/>  |
| $\frac{8}{8}$ de 8 = <input type="text"/> <input type="text"/>  | $\frac{5}{6}$ de 54 = <input type="text"/> <input type="text"/>  | $\frac{1}{2}$ de 10 = <input type="text"/> <input type="text"/>  |

