












Puzzle fracción de un número

Calcula, Recorta, pega y colorea.

Nombre: Fecha:

$\frac{1}{8}$ de 24 = <input type="text"/> <input type="text"/>  $24 \begin{array}{r} 8 \\ 3 \end{array} \quad \begin{array}{r} 3 \\ \times 1 \\ 3 \end{array}$	$\frac{3}{4}$ de 40 = <input type="text"/> <input type="text"/> 	$\frac{1}{5}$ de 50 = <input type="text"/> <input type="text"/> 
$\frac{1}{4}$ de 24 = <input type="text"/> <input type="text"/> 	$\frac{1}{6}$ de 6 = <input type="text"/> <input type="text"/> 	$\frac{3}{3}$ de 6 = <input type="text"/> <input type="text"/> 
$\frac{1}{1}$ de 9 = <input type="text"/> <input type="text"/> 	$\frac{4}{7}$ de 14 = <input type="text"/> <input type="text"/> 	$\frac{3}{3}$ de 18 = <input type="text"/> <input type="text"/> 
$\frac{1}{2}$ de 18 = <input type="text"/> <input type="text"/> 	$\frac{4}{4}$ de 32 = <input type="text"/> <input type="text"/> 	$\frac{5}{5}$ de 35 = <input type="text"/> <input type="text"/> 