












Puzzle fracción de un número

Calcula, Recorta, pega y colorea.

Nombre: Fecha:

$\frac{4}{7}$ de 63 = <input type="text"/> <input type="text"/>  $63 \begin{array}{r} 7 \\ 9 \end{array} \quad \begin{array}{r} 9 \\ \times 4 \\ \hline 36 \end{array}$	$\frac{4}{5}$ de 45 = <input type="text"/> <input type="text"/> 	$\frac{2}{3}$ de 18 = <input type="text"/> <input type="text"/> 
$\frac{2}{6}$ de 24 = <input type="text"/> <input type="text"/> 	$\frac{4}{5}$ de 10 = <input type="text"/> <input type="text"/> 	$\frac{2}{5}$ de 35 = <input type="text"/> <input type="text"/> 
$\frac{4}{4}$ de 28 = <input type="text"/> <input type="text"/> 	$\frac{1}{5}$ de 5 = <input type="text"/> <input type="text"/> 	$\frac{1}{2}$ de 8 = <input type="text"/> <input type="text"/> 
$\frac{1}{1}$ de 5 = <input type="text"/> <input type="text"/> 	$\frac{1}{1}$ de 1 = <input type="text"/> <input type="text"/> 	$\frac{3}{3}$ de 3 = <input type="text"/> <input type="text"/> 