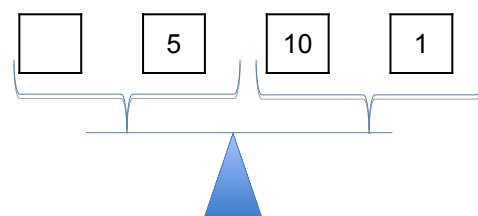
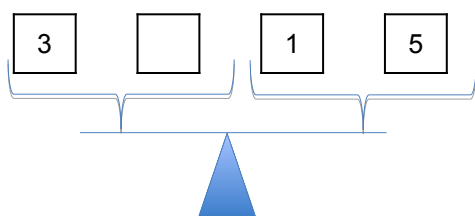
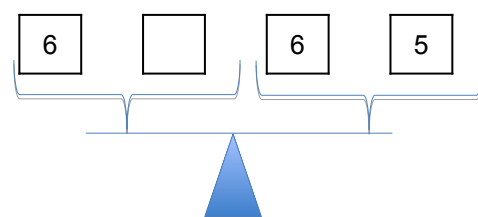
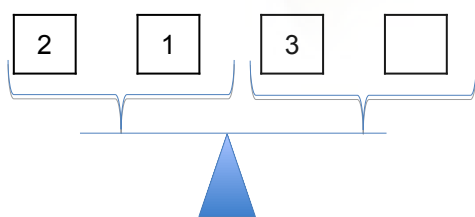
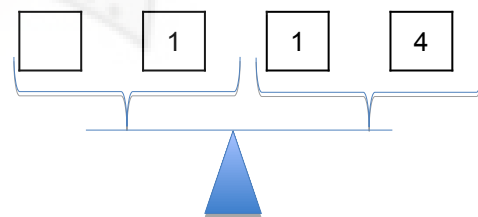
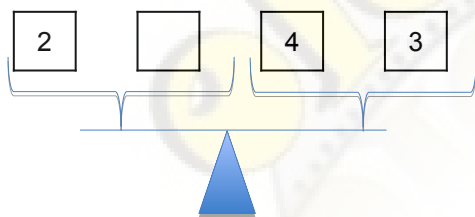
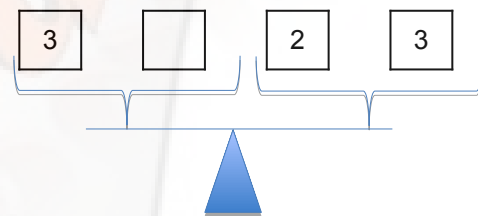
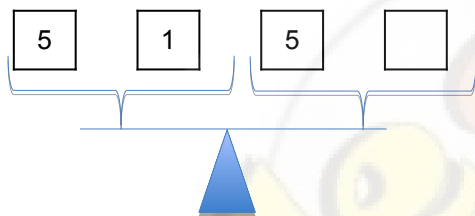
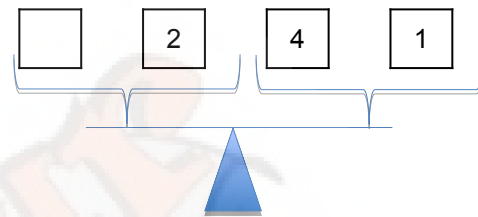
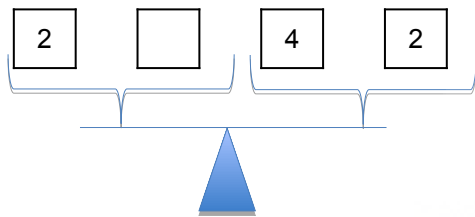
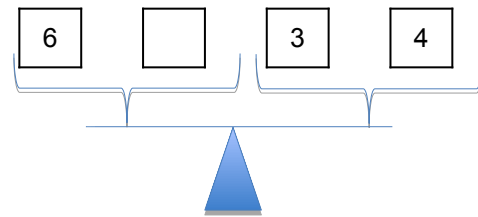
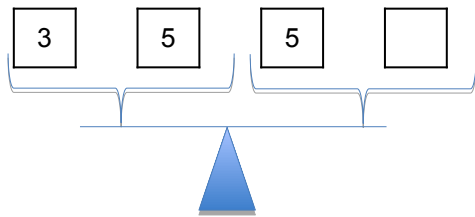


# Balanzas Matemáticas



# Balanzas Matemáticas

Coloca las balanzas en su lugar



□	□	□	□
}		}	
▲			
10			
0			
1			
9			

□	□	□	□
}		}	
▲			
0			
5			
6			
1			

□	□	□	□
}		}	
▲			
12			
8			
5			
1			

□	□	□	□
}		}	
▲			
3			
3			
6			
0			

□	□	□	□
}		}	
▲			
5			
0			
6			
1			

□	□	□	□
}		}	
▲			
1			
3			
9			
7			

□	□	□	□
}		}	
▲			
4			
1			
0			
5			

□	□	□	□
}		}	
▲			
10			
7			
5			
2			