





Ecuaciones Visuales Resuelve estos enigmas visuales.





 = 9


 = 8


 = 6


 = ?


 = 6


 = 5


 = 21


 = ?


 = 9


 = 18


 = 40


 = ?


 = 12


 = 28


 = 42


 = ?


 = 12


 = 30


 = 59

 = ?

 = 14

 = 23

 = 85

 = ?