

Nombre:

Fecha:

Resuelve el cálculo y coloca donde corresponda.



2x17

2x4

2x3

2x19

2x2

2x5

2x5



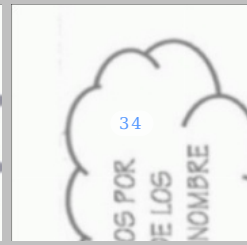


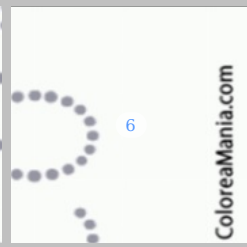






2x2

2x7

2x11

2x10

2x12

| | | |
|---|---|---|
|  14 |  8 |  34 OS POR E LOS NOMBRE |
|  22 |  4 |  6 ColoreaMania.com |
|  10 |  10 |  4 |
|  20 |  38 REPASAM ENCIMA PUNTOS M |  24 |

