





Ecuaciones Visuales Resuelve estos enigmas visuales.





 = 12


 = 16


 = 12


 = ?


 = 16


 = 24


 = 26


 = ?


 = 2


 = 18


 = 20


 = ?


 = 3


 = 11


 = 80


 = ?


 = 6


 = 16


 = 68

 = ?

 = 24

 = 24

 = 64

 = ?