










Ecuaciones Visuales Resuelve estos enigmas visuales.






 = 8



 +  = 8




 +  +  = 13


 +  +  = ?



 = 10




 +  = 26




 +  = 38


 +  +  = ?



 = 12




 +  = 15




 +  +  = 68


 +  +  = ?



 = 6



 +  = 16




 +  +  = 61


 +  +  = ?



 = 3



 +  = 36




 +  = 145

 +  +  = ?

 = 16

 +  = 46

 -  = 80

 +  +  = ?