












# Puzzle fracción de un número

Calcula, Recorta, pega y colorea.



Nombre: ..... Fecha: .....

$\frac{4}{6}$ de 36 = ..... <input type="text"/> <input type="text"/>  $36 \begin{array}{r}  6 \\ 6 \end{array} \quad \begin{array}{r} 6 \\ \times 4 \\ \hline 24 \end{array}$	$\frac{7}{9}$ de 18 = ..... <input type="text"/> <input type="text"/> 	$\frac{1}{2}$ de 18 = ..... <input type="text"/> <input type="text"/> 
$\frac{1}{2}$ de 2 = ..... <input type="text"/> <input type="text"/> 	$\frac{2}{3}$ de 18 = ..... <input type="text"/> <input type="text"/> 	$\frac{3}{5}$ de 5 = ..... <input type="text"/> <input type="text"/> 
$\frac{2}{6}$ de 60 = ..... <input type="text"/> <input type="text"/> 	$\frac{4}{4}$ de 28 = ..... <input type="text"/> <input type="text"/> 	$\frac{1}{4}$ de 16 = ..... <input type="text"/> <input type="text"/> 
$\frac{1}{3}$ de 27 = ..... <input type="text"/> <input type="text"/> 	$\frac{4}{4}$ de 16 = ..... <input type="text"/> <input type="text"/> 	$\frac{3}{3}$ de 12 = ..... <input type="text"/> <input type="text"/> 