













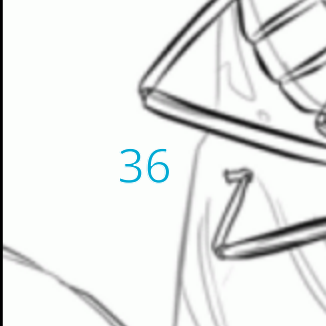
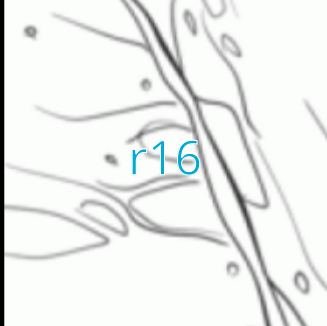










Puzzle fracción de un número

Calcula, Recorta, pega y colorea.



Nombre: Fecha:

$\frac{2}{3}$ de 6 = <input type="text"/> <input type="text"/>  $6 \begin{array}{r} 3 \\ \hline 2 \end{array} \quad \begin{array}{r} \\ \hline \end{array} \times \frac{2}{4}$	$\frac{1}{2}$ de 18 = <input type="text"/> <input type="text"/> 	$\frac{2}{7}$ de 70 = <input type="text"/> <input type="text"/> 
$\frac{9}{9}$ de 36 = <input type="text"/> <input type="text"/> 	$\frac{4}{8}$ de 24 = <input type="text"/> <input type="text"/> 	$\frac{1}{4}$ de 4 = <input type="text"/> <input type="text"/> 
$\frac{1}{1}$ de 8 = <input type="text"/> <input type="text"/> 	$\frac{2}{6}$ de 60 = <input type="text"/> <input type="text"/> 	$\frac{3}{3}$ de 30 = <input type="text"/> <input type="text"/> 
$\frac{1}{6}$ de 30 = <input type="text"/> <input type="text"/> 	$\frac{1}{1}$ de 6 = <input type="text"/> <input type="text"/> 	$\frac{1}{1}$ de 10 = <input type="text"/> <input type="text"/> 

 36	 r16	 6
 20	 5	 12
 9	 10	 r36
 20	 1	 4