













# Puzzle fracción de un número

Calcula, Recorta, pega y colorea.



Nombre: ..... Fecha: .....

|   |  |   |
|---|--|---|
| $\frac{9}{9}$ de 27 = .....<br><input type="text"/><br><input type="text"/><br><br>$27 \begin{array}{r}  9 \\ 3 \end{array} \quad \begin{array}{r} 3 \\ \times 9 \\ \hline 27 \end{array}$ | $\frac{3}{5}$ de 20 = .....<br><input type="text"/><br><input type="text"/><br>   | $\frac{2}{3}$ de 15 = .....<br><input type="text"/><br><input type="text"/><br>  |
| $\frac{8}{9}$ de 36 = .....<br><input type="text"/><br><input type="text"/><br>  | $\frac{5}{9}$ de 18 = .....<br><input type="text"/><br><input type="text"/><br>   | $\frac{5}{6}$ de 42 = .....<br><input type="text"/><br><input type="text"/><br>  |
| $\frac{4}{8}$ de 56 = .....<br><input type="text"/><br><input type="text"/><br>   | $\frac{2}{3}$ de 30 = .....<br><input type="text"/><br><input type="text"/><br>  | $\frac{3}{3}$ de 27 = .....<br><input type="text"/><br><input type="text"/><br> |
| $\frac{1}{1}$ de 7 = .....<br><input type="text"/><br><input type="text"/><br>   | $\frac{2}{9}$ de 18 = .....<br><input type="text"/><br><input type="text"/><br> | $\frac{4}{8}$ de 8 = .....<br><input type="text"/><br><input type="text"/><br> |

|    |     |     |
|----|-----|-----|
| 32 | r16 | 4   |
| 20 | 7   | 10  |
| 12 | 4   | r36 |
| 10 | 35  | 27  |